

**Solve each problem.****Answers**

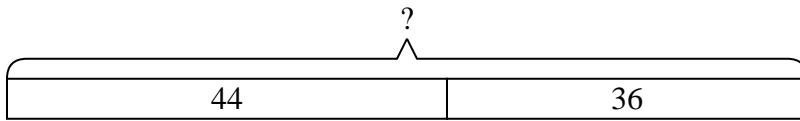
- 1) At the fair Katie started with 44 tickets and then bought 36 more. How many tickets did Katie have total?
- 2) On Facebook Faye had 29 photos of her friends and 41 photos of her family. How many photos did she have total?
- 3) Ned collected 39 cans to recycle on Monday and 27 more on Tuesday. How many cans did Ned collect all together?
- 4) In the first half of a trivia game Billy scored 33 points. In the second half he scored 14 points. How many points did he score total?
- 5) Tiffany had 17 DS games and her friend had 49 games. How many do they have total?
- 6) On Saturday Sam bought 35 trading cards. On Sunday he bought 14 more. How many cards did he buy total?
- 7) At the zoo Haley took 17 pictures. If her sister took another 50 pictures, how many did they take total?

1. _____
2. _____
3. _____
4. _____
5. _____
6. _____
7. _____

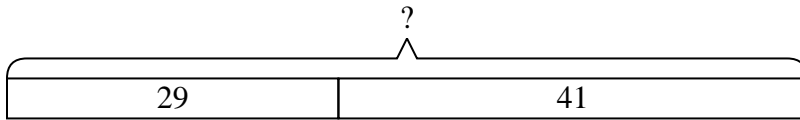


Solve each problem.

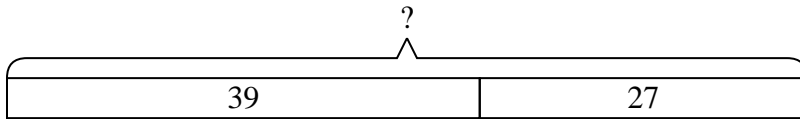
- 1) At the fair Katie started with 44 tickets and then bought 36 more. How many tickets did Katie have total?



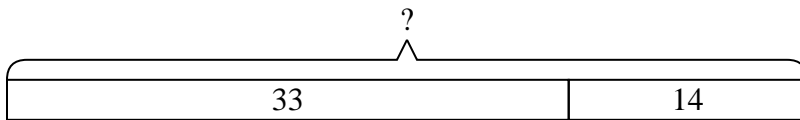
- 2) On Facebook Faye had 29 photos of her friends and 41 photos of her family. How many photos did she have total?



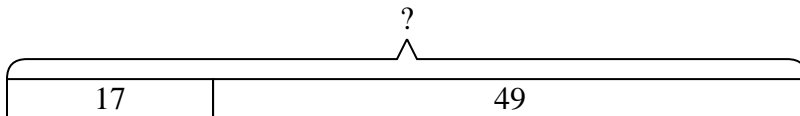
- 3) Ned collected 39 cans to recycle on Monday and 27 more on Tuesday. How many cans did Ned collect all together?



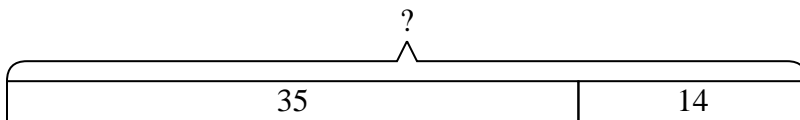
- 4) In the first half of a trivia game Billy scored 33 points. In the second half he scored 14 points. How many points did he score total?



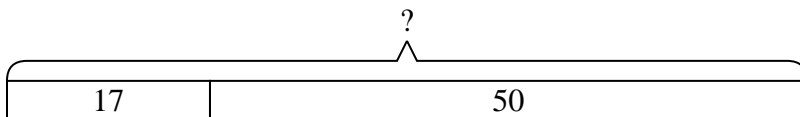
- 5) Tiffany had 17 DS games and her friend had 49 games. How many do they have total?



- 6) On Saturday Sam bought 35 trading cards. On Sunday he bought 14 more. How many cards did he buy total?



- 7) At the zoo Haley took 17 pictures. If her sister took another 50 pictures, how many did they take total?

**Answers**

1. **80**
2. **70**
3. **66**
4. **47**
5. **66**
6. **49**
7. **67**